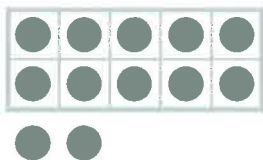


Name _____

Kindergarten


Go Math Chapter 7 Scoring Guide

1
1pt



12

1
1pt

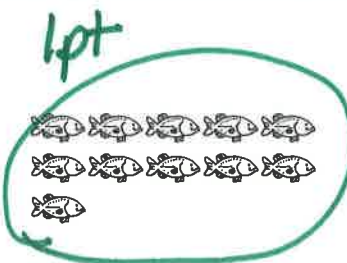


13

3
2pts




1pt
10 + 1



-1pt if circled ↓

4
3pts




- | | | | |
|--------|--------------------------------------|-------------------------------------|-----|
| 15 | <input type="radio"/> Yes | <input checked="" type="radio"/> No | 1pt |
| 14 | <input checked="" type="radio"/> Yes | <input type="radio"/> No | 1pt |
| 10 + 4 | <input checked="" type="radio"/> Yes | <input type="radio"/> No | 1pt |

DIRECTIONS 1–2. How many objects are there? Write the number. 3. Choose all the ways that show 11. 4. Is this a way to write the number of bears in the set? Choose Yes or No.

GO ON


Name _____

5
2pts



1 pt for counting & writing number

17




==

17

1 pt for number sentence

6
2pts



1 pt for counting

15



==

15

1 pt for number sentence

7
2pts




1pt

16

17

1pt

8
3pts



1 pt for drawing

1 pt for circling a group of 10

13

1 pt for writing number
hats

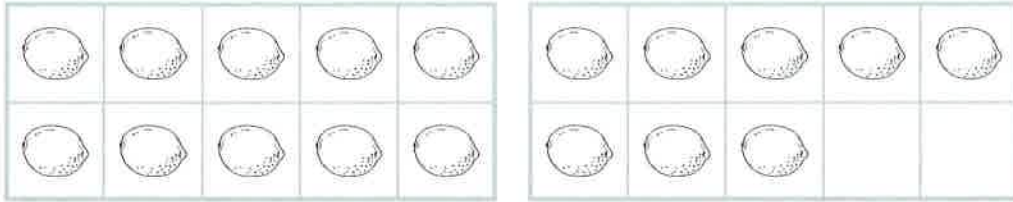
DIRECTIONS 5–6. Count how many. Write the number. Complete the addition sentence. 7. Draw lines to match the ten frames to the numbers they show. 8. There are 6 green hats and 7 blue hats. Draw the hats. Circle a group of 10. How many hats are there in all?

GO ON

Name _____



1 pt

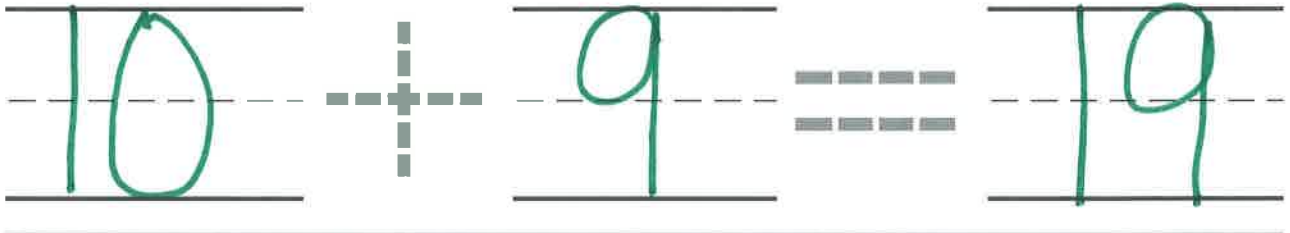



10 ones and 8 ones

9



1 pt

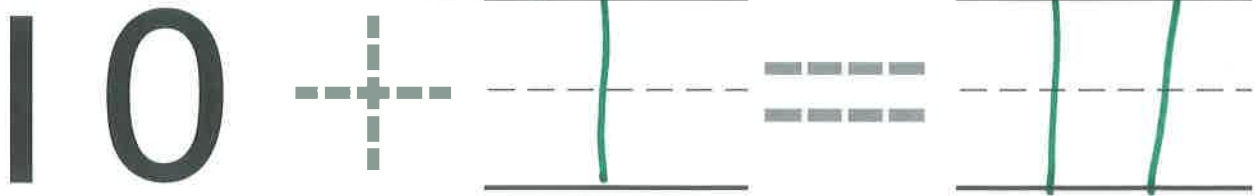


2 pts



1 pt for any correct drawing

1 pt for correct number sentence




DIRECTIONS 9. How many more ones are needed to show the number of lemons? Circle the number. 10. Look at the ten frames. Complete the addition sentence. 11. Vicki was told to pick up 10 sticks. She picked up one extra stick. How many sticks are there in all? Draw the sticks. Complete the addition sentence.



Name _____

12
1 pt

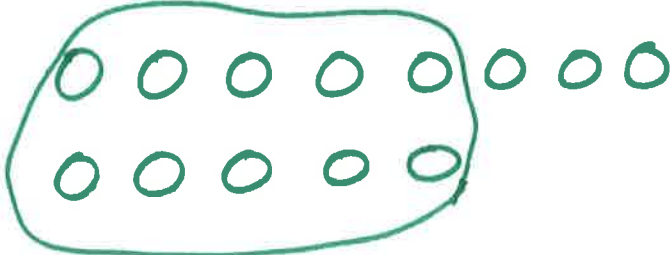


$18 = 10 + 8$

13
1 pt

10 11 12 13 14

14
3 pts



1 pt for correct drawing
1 pt for circling a group of 10
1 point for correctly completing # sentence

$10 + 3 = 13$

DIRECTIONS 12. What number do the ten frames show? Complete the addition sentence to show the number. 13. Count in order. Fill in the missing numbers. 14. Franklin has 8 blue buttons and 5 green buttons. Draw the buttons. Circle a group of 10 buttons. Count the remaining buttons starting from 10. Complete the addition sentence.

