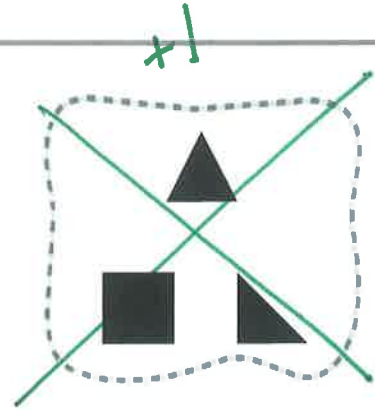
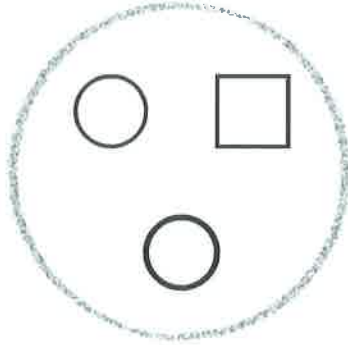


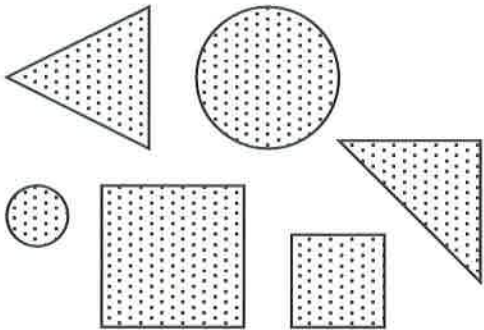
Chapter 12 Scoring Guide

+1 pt

1

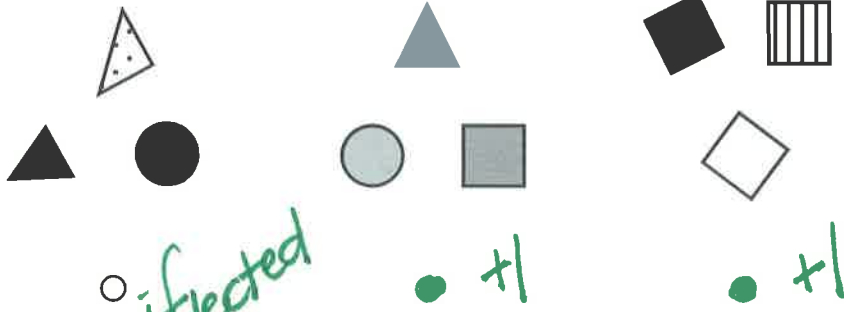


+1 pt



+2 possible

3



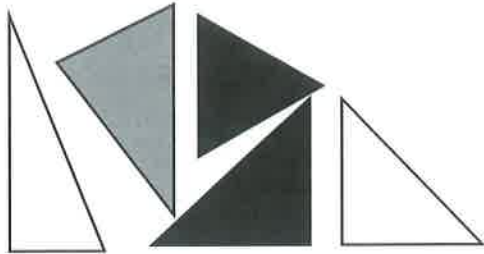
DIRECTIONS 1. Hani sorted some shapes into categories by color. Look at the shape at the beginning of the row. Mark an X on the category that shows where the shape belongs. 2. Draw and color a shape that belongs in this category. 3. Look at the shape at the beginning of the row. Mark under all of the categories where the shape can belong.



Name _____

4


+1



+1 for drawing of a triangle

5

+4 possible



1 point for circling all 3 small shapes
1 point for "X"-ing both large shapes

small

3

1 point for correctly written 3


large

2

1 point for correctly written 2

6

+2 possible



big

small

1 point for each correct match

- DIRECTIONS** 4. Draw another object that belongs in this category.
5. Draw a circle around each small shape. Write how many small shapes. Mark an X on each big shape. Write how many large shapes. 6. Draw lines to match the shapes to the way they were sorted.

GO ON

Name _____

+4 points possible



3 - 1 pt for correctly writing the number 3

Triangles and Circles				

+1 for drawing 3's
+1 for drawing 5's

5 - 1 pt for correctly writing the number 5



+1







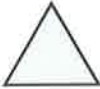


Circles and Squares				

1 pt →

DIRECTIONS 7. Sort and classify the shapes by category. Draw each shape on the graph. Write how many of each shape. 8. Rita sorted some shapes. Then she made a graph. Count how many shapes there are in each category. Mark an X on the category that has more shapes.



9
+ 3 points possible

Chart H				
				
				

deduct in correct choices from correct choices.

color

Yes

No +1

size

+1 Yes

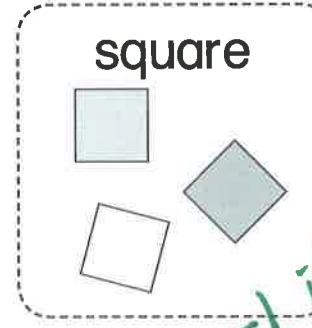


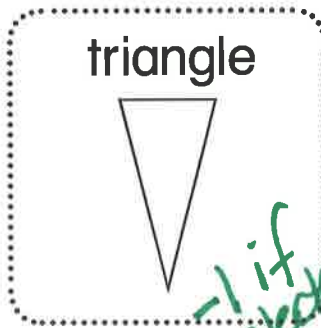
No -1 if selected

shape

+1 Yes

No -1 if selected

10
+ 2 points possible



DIRECTIONS 9. Is this chart sorted by color, size, and shape?

Choose Yes or No. 10. Choose all of the sets with the same number of objects.

