

















Chapter 10 Scoring Guide

Use the picture graph to answer the questions.

Pet We Have							
 dog							
 cat							
 hamster							

Each  stands for 1 child

+1

1. How many children have  ?

5

2. Is the sentence true? Choose Yes or No.

+3 possible

More children have dogs than cats.

+1 ● Yes

○ No

6 children have dogs.

+1 ● Yes

○ No

2 more children have hamsters than cats.

-1 if selected ○ Yes

+1 ● No

-1 if selected

-1 if selected

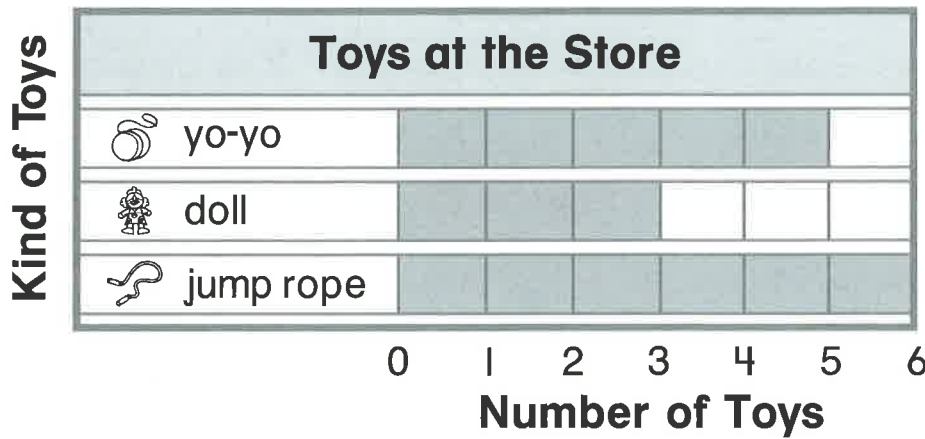
3. 1 more child gets a . Draw what the hamster row looks like now.

+1

 hamster							
---	---	---	---	--	--	--	--

GO ON 

Use the bar graph to answer the questions.



4. How many does the store have?

+1 3

5. Compare and . Circle the number that makes the sentence true.

+1 There are 1
2 more than .

3

6. Jason says the graph shows 2 more yo-yos than dolls. Is he correct? Choose Yes or No.




+2 possible +1 Yes No

Explain your answer.

+1 for correct explanation.



Use the tally chart to answer the questions.

Our Favorite Lunch		Total
 pizza		8
 salad		
 spaghetti		

7. How many children chose  ?

+1

5


8. Draw tally marks for the number of pizzas that the chart shows.

+1


|||| |||

9. Circle the words that make the sentence true.






+1

The number of tally marks for  is

greater than
less than
equal to

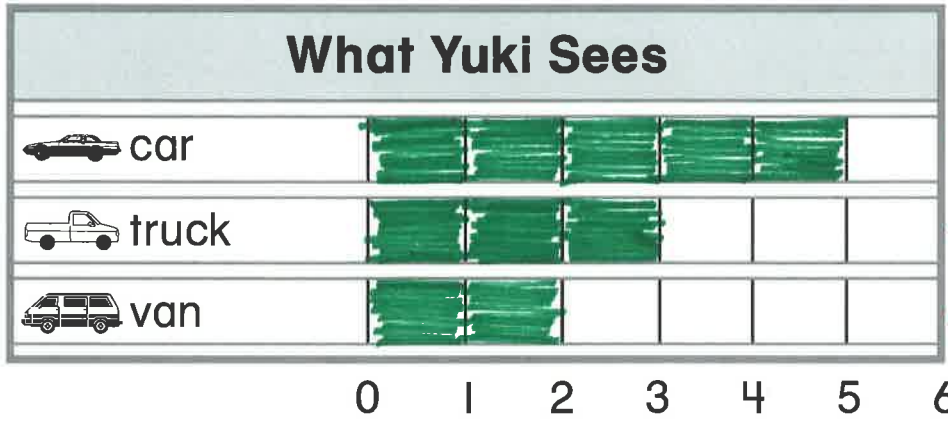
the number of tally marks for .



10. Yuki sees 3 . She sees 2 more  than . She sees 1 fewer  than .

Graph the data.

+3 possible



+1 for 5 boxes
+1 for 3 boxes
+1 for 2 boxes

Use Yuki's graph to answer the questions.

11. How many  does Yuki see?

+1

5

12. Write another question that can be answered by Yuki's graph.

+1

+1 for any correct question with a question mark @ the end.

